













# MONEY MATH

Look at the shopping items below then calculate the total of each shopping basket.

banana 50p 	sausage 75p 	juice = £1.65 
cupcake = £1.50 	pineapple = £3 	cheese = £1.20 
bread = £2.75 	ice-cream = £4.20 	milk = £2.10 
watermelon = £3 	candies = 50p 	apple = 75p 

## Shopping Baskets

Shopping basket	Total	Shopping basket	Total
1 cupcake 3 bananas 2 apples		1 ice-cream 2 cheese 6 candies	
2 bread 2 milk 2 sausages		3 cheese 1 milk 2 pineapples	
12 candies 1 watermelon 1 juice		6 apples 1 juice 8 bananas	